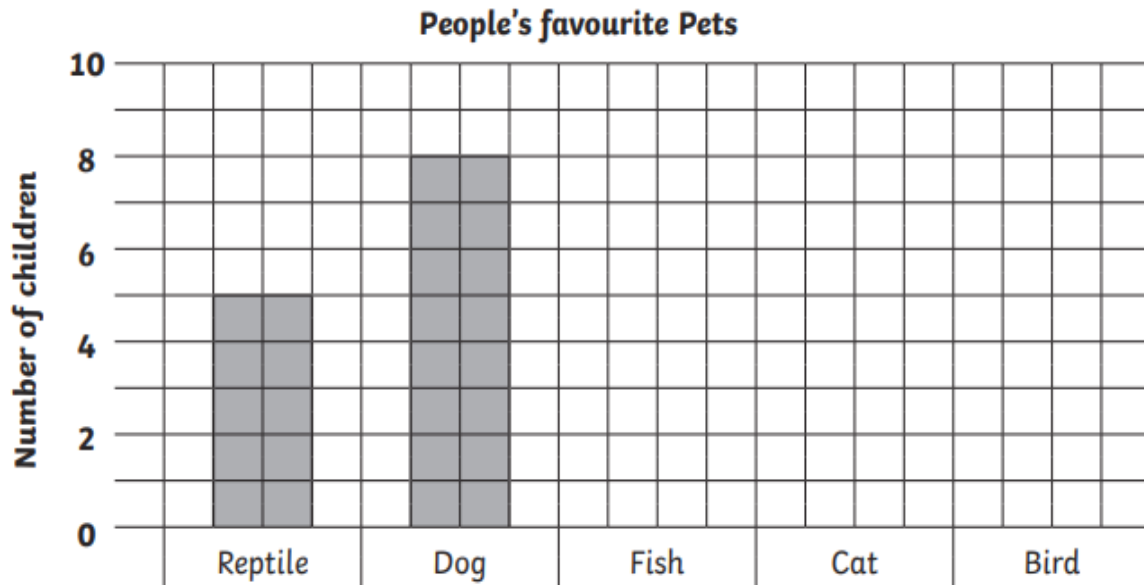


Interpreting bar graphs

Mild

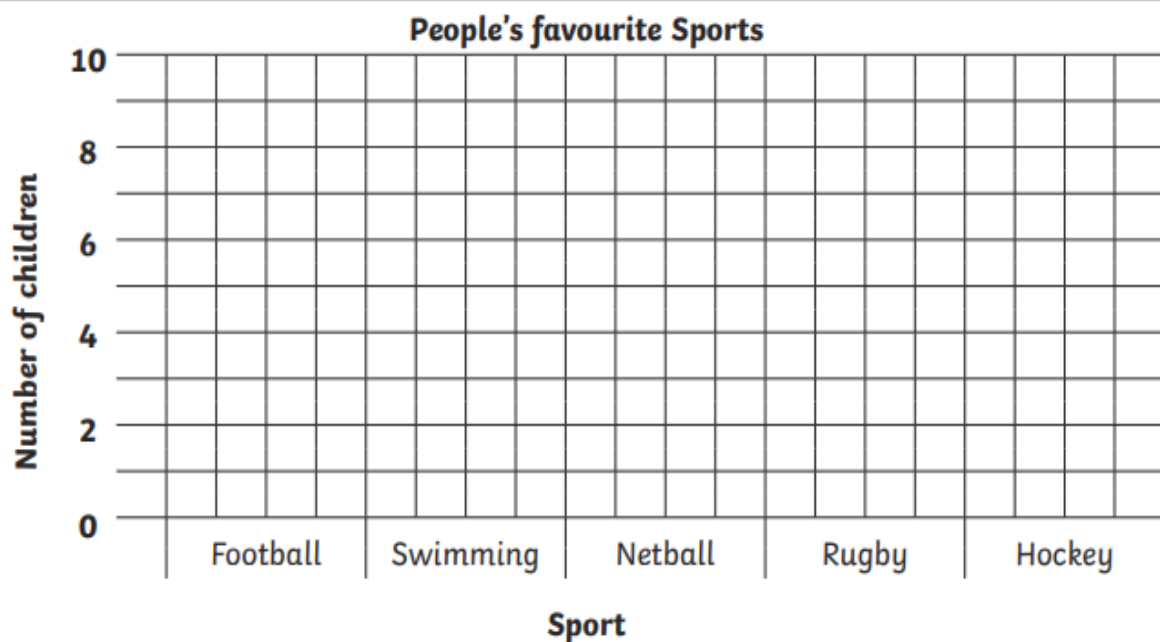
1. A group of children record their favourite pets. Here are the results.
Complete the bar chart using the information in the table.

Favourite Pet	Reptile	Dog	Fish	Cat	Bird
Number of Children	5	8	8	7	6



2. The favourite sport of some children is recorded. Here are the results. Complete the bar chart on the grid below from the given information.

Favourite Sport	Football	Swimming	Netball	Rugby	Hockey
Number of Children	9	10	8	5	7



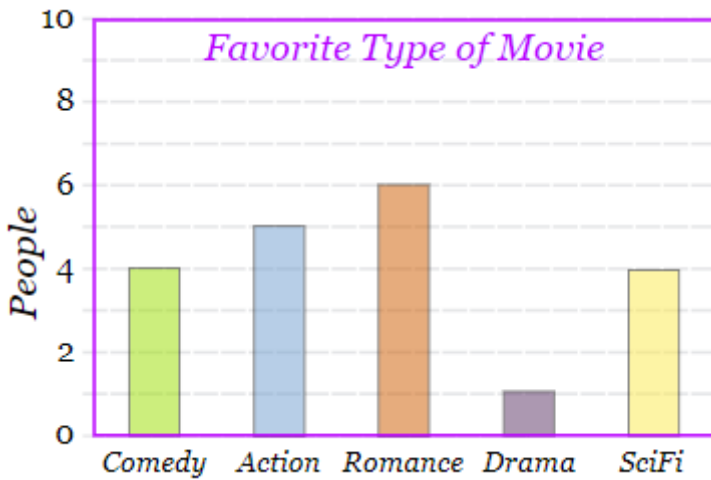
Interpreting bar graphs

Hot

Jason is collecting information on people's favourite types of films. His collection looks like this:

Favourite Type of Movie	Comedy	Action	Romance	Drama	Sci-Fi
People	4	6	6	2	5

He also created a bar graph to fit this information. What mistakes has Jason made?



Spicy

Conduct your own research to find out what flavours of ice cream people like. Use the table and graph below to show what you have found out!

Flavours	Chocolate	Strawberry	Vanilla	Other	None
People					

