

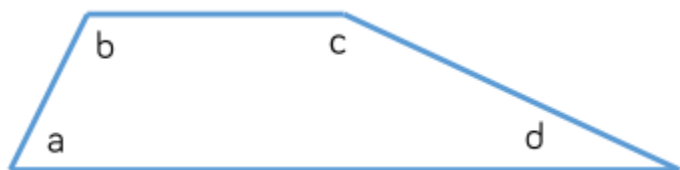
L.O. To compare and order angles by estimating their size.

Layer 1 – What are the missing words?

Acute angles are _____ than right angles.

Obtuse angles are _____ than acute angles.

Right angles are _____ than obtuse angles.



Angle d is _____ than angle b.

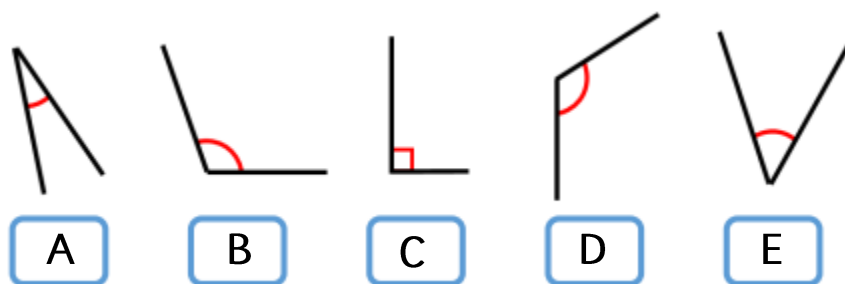
Angle c is _____ than angle a.

Angle _____ is the largest angle.

Angle _____ is the smallest angle.

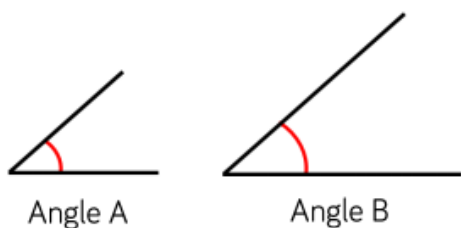
Layer 2 – Compare and order the angles

Put them in order from smallest to biggest.



Layer 3 – Do you agree?

Explain your answer.



Ron

Angle B is bigger than Angle A because it has longer sides.

Greater Depth – Odd one out.

There are 5 angles in the picture. There are two pairs of identical angles and one odd one out.

Which is the odd one out? Explain how you know.

