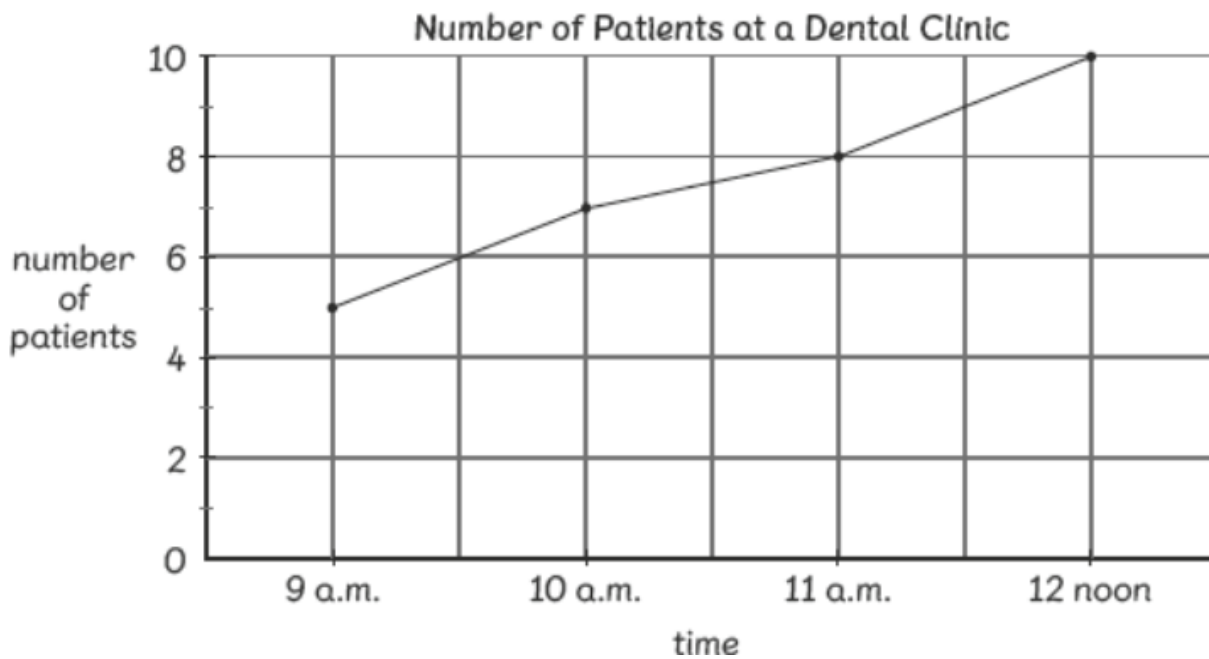
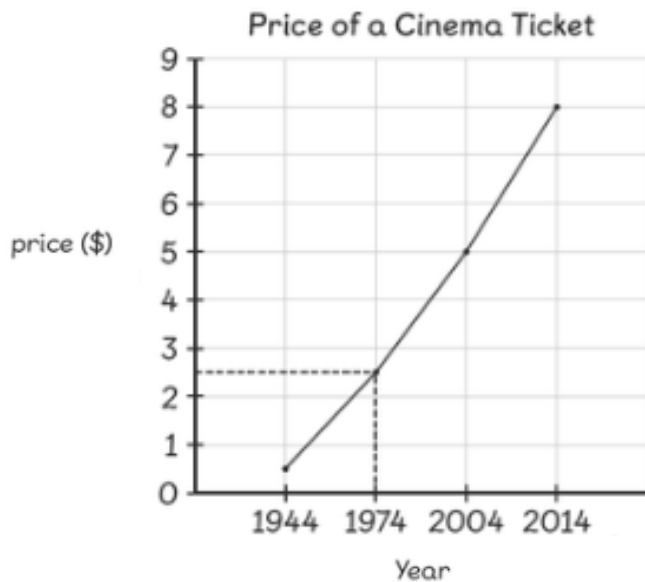


Layer 1 – The line graph below shows the number of patients at a dental clinic from 9 a.m. to 12 noon.



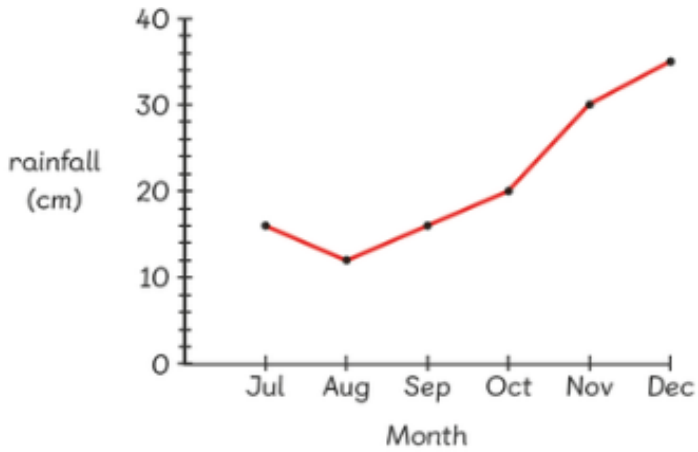
- a) How many patients were at the clinic at 9 a.m.?
- b) At what time was there the most patients?
- c) At what time was there the least number of patients?
- d) What was the difference between the number of patients at 10 a.m. and 12 noon?
- e) Does the number of patients increase or decrease from 9 a.m. to 12 noon?

Layer 2 Spot the mistake with this line graph.

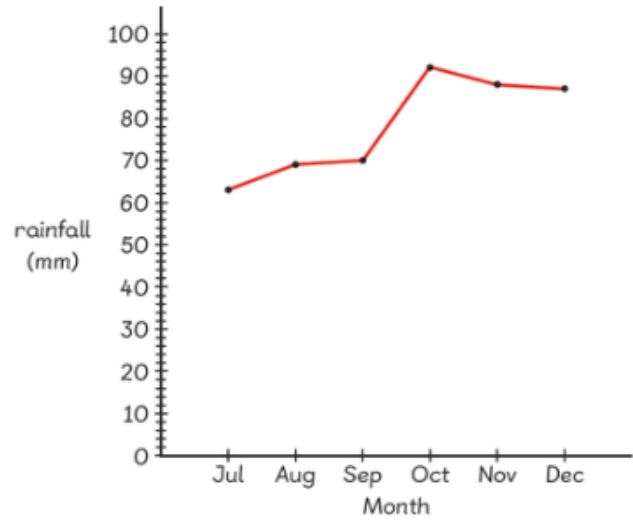


Layer 3 Below are two line graphs showing rainfall. One shows rainfall in Singapore and the other shows rainfall in London.

Amount of Rainfall in Singapore



Amount of Rainfall in London



Complete the table.

	Singapore	London
Greatest amount of rainfall		
Least amount of rainfall		
Difference between the greatest and least amount of rainfall		

What is the same about these line graphs? What is different?

Greater Depth – Write a story to match the graph below.

